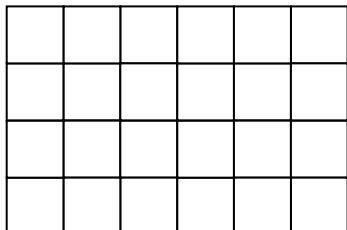


Aufgabe 2

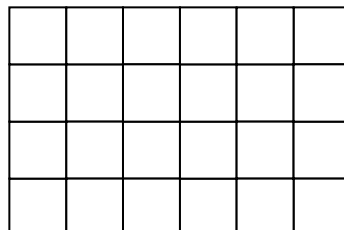
Färbe jeweils den angegebenen Anteil der Fläche farbig!

Aufgabe 2a

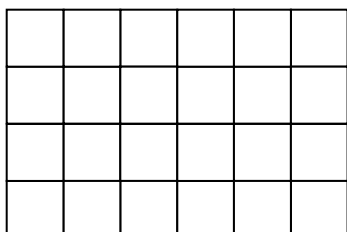
50%



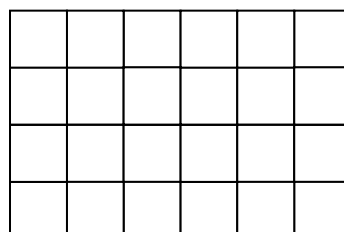
25%



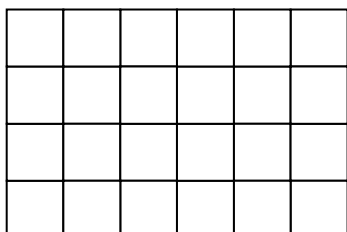
$33\frac{1}{3}\%$



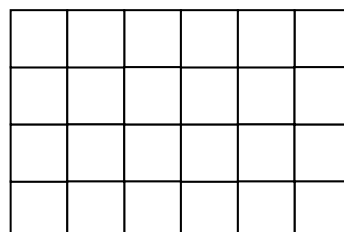
75%



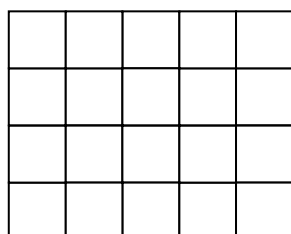
100 %



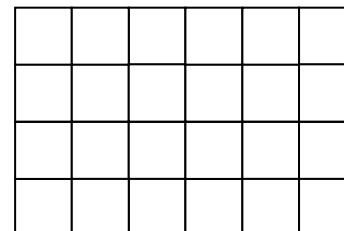
12,5%



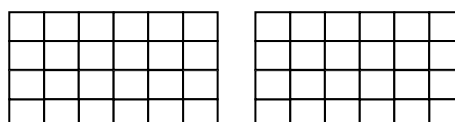
5%



150%

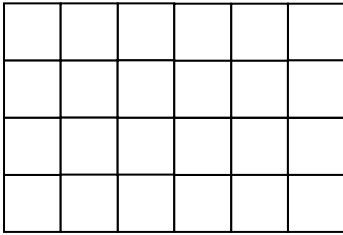


Hilfe zu 150%:

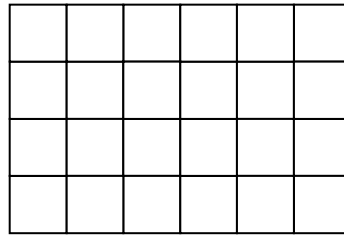


Aufgabe 2b

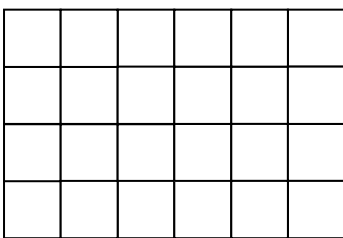
die Hälfte der Fläche



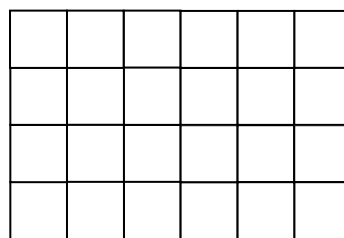
ein Viertel der Fläche



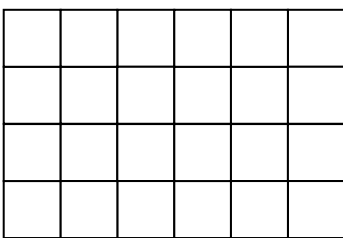
ein Drittel der Fläche



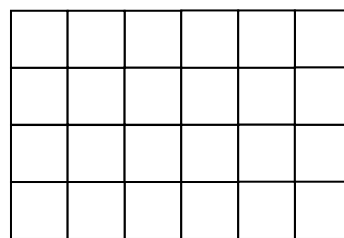
Dreiviertel der Fläche



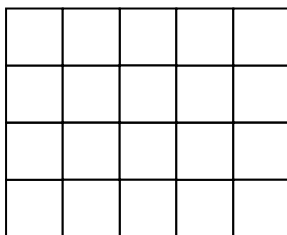
ein Ganzes der Fläche



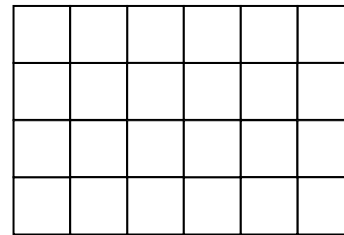
ein Achtel der Fläche



ein Zwanzigstel der Fläche



das Eineinhalbfache der Fläche



Hilfe zu das Eineinhalbfache der Fläche:

